

Distance between 2 Points

Find the distance between each pair of points.

1) $(7, 8), (2, 0)$

2) $(3, -4), (-3, -8)$

3) $(-4, 0), (5, -1)$

4) $(-7, -5), (8, -1)$

5) $(3, 0), (7, 6)$

6) $(-8, 0), (-8, 5)$

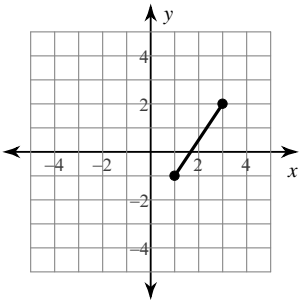
7) $(-1, -5), (-7, 7)$

8) $(6, 4), (-5, 6)$

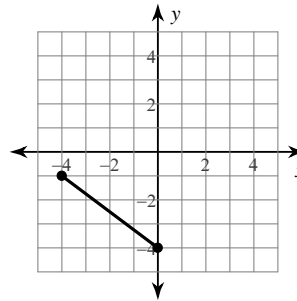
9) $(-5, 4), (-2, -4)$

10) $(-1, 8), (-5, -4)$

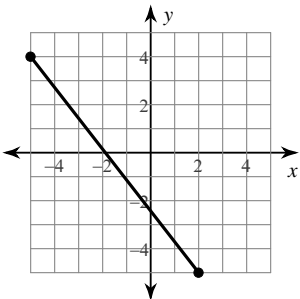
11)



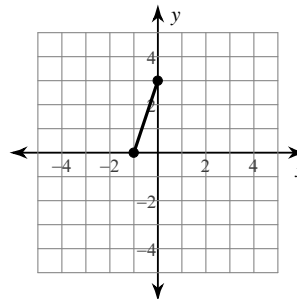
12)



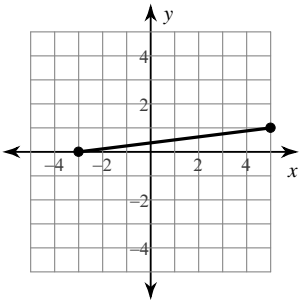
13)



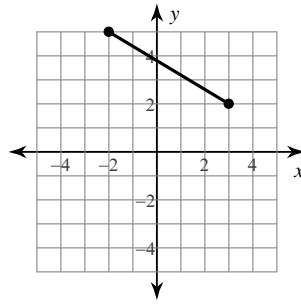
14)



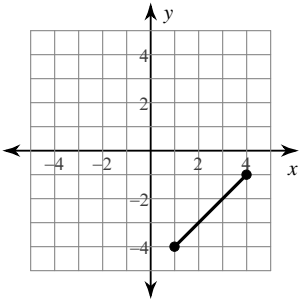
15)



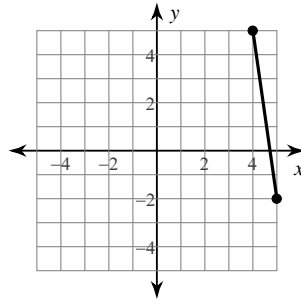
16)



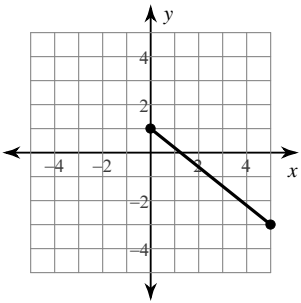
17)



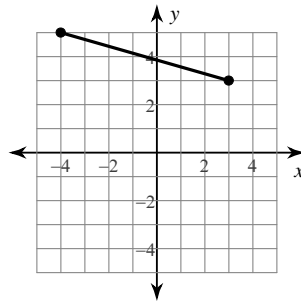
18)



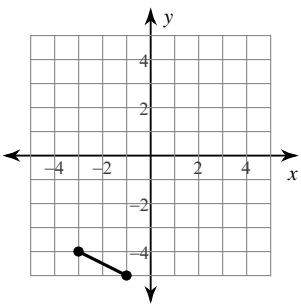
19)



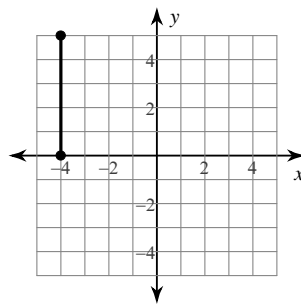
20)



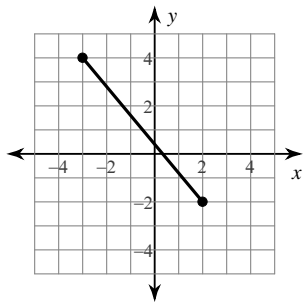
21)



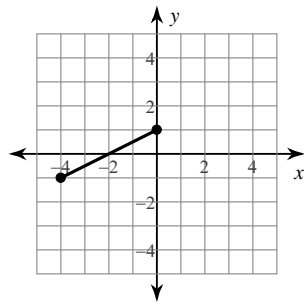
22)



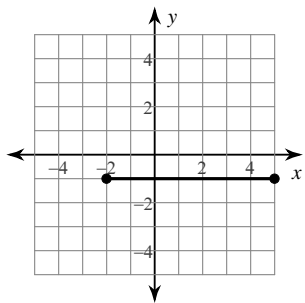
23)



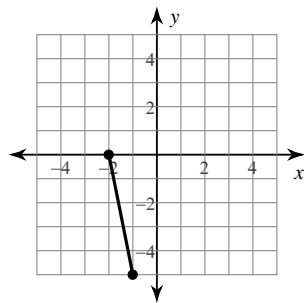
24)



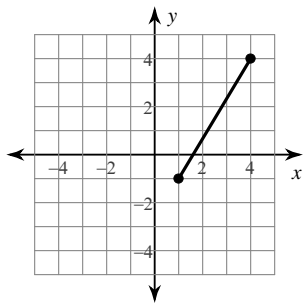
25)



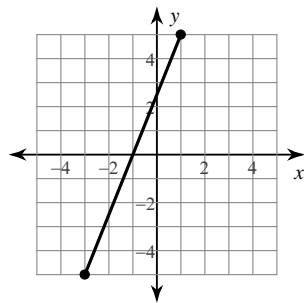
26)



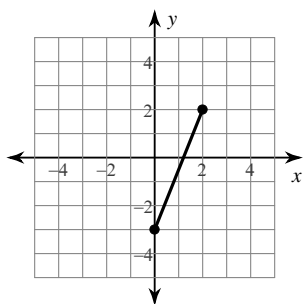
27)



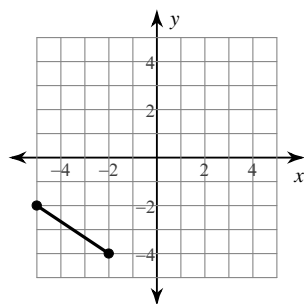
28)



29)



30)



Answers to Distance between 2 Points (ID: 1)

- | | | | |
|------------|------------|-----------|-----------|
| 1) 9.434 | 2) 7.211 | 3) 9.055 | 4) 15.524 |
| 5) 7.211 | 6) 5 | 7) 13.416 | 8) 11.18 |
| 9) 8.544 | 10) 12.649 | 11) 3.606 | 12) 5 |
| 13) 11.402 | 14) 3.162 | 15) 8.062 | 16) 5.831 |
| 17) 4.243 | 18) 7.071 | 19) 6.403 | 20) 7.28 |
| 21) 2.236 | 22) 5 | 23) 7.81 | 24) 4.472 |
| 25) 7 | 26) 5.099 | 27) 5.831 | 28) 10.77 |
| 29) 5.385 | 30) 3.606 | | |