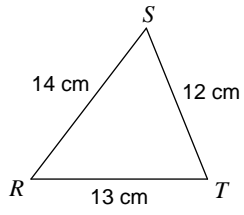


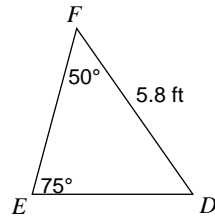
Area of Triangles Practice

Find the area of each triangle to the nearest tenth.

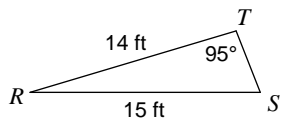
1)



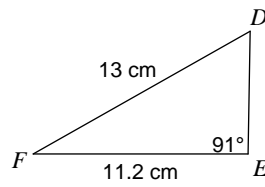
2)



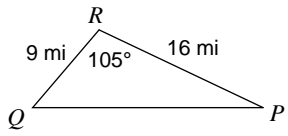
3)



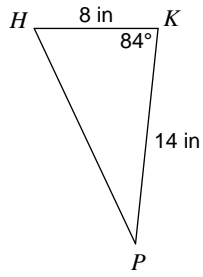
4)



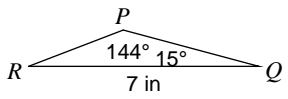
5)



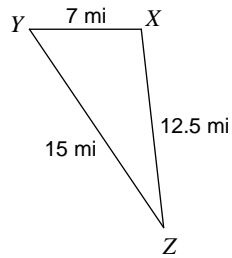
6)



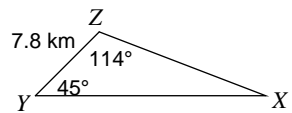
7)



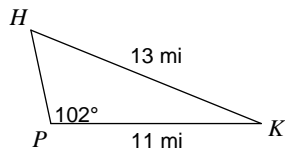
8)



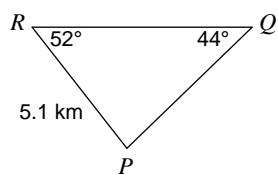
9)



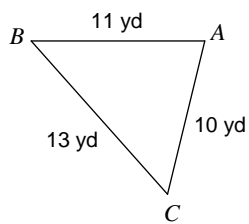
10)



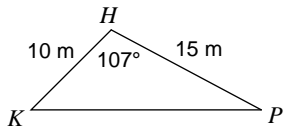
11)



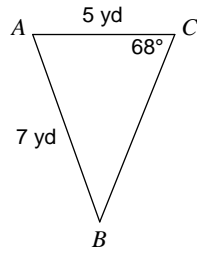
12)



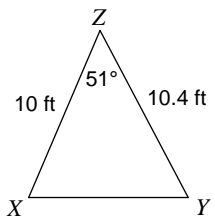
13)



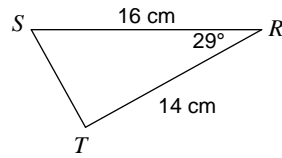
14)

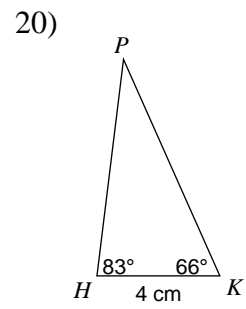
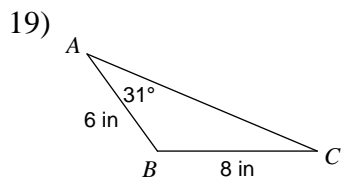
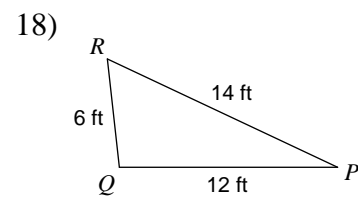
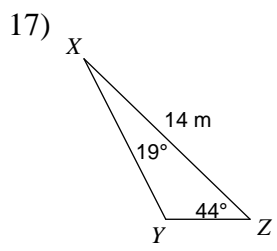


15)



16)





Answers to Area of Triangles Practice (ID: 1)

1) 72.3 cm^2

5) 69.5 mi^2

9) 54.9 km^2

13) 71.7 m^2

17) 24.8 m^2

2) 10.9 ft^2

6) 55.7 in^2

10) 26.9 mi^2

14) 16.5 yd^2

18) 35.8 ft^2

3) 30 ft^2

7) 3.9 in^2

11) 14.7 km^2

15) 40.4 ft^2

19) 19.3 in^2

4) 35.8 cm^2

8) 43.5 mi^2

12) 53.4 yd^2

16) 54.3 cm^2

20) 14.1 cm^2