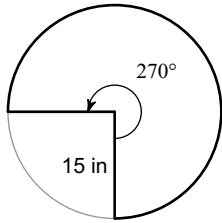


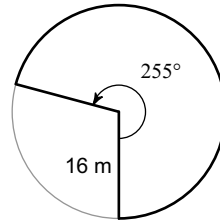
# Area of Sectors

Find the area of each sector. Round your answers to the nearest tenth.

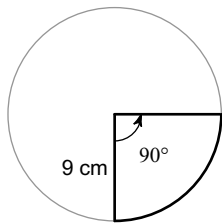
1)



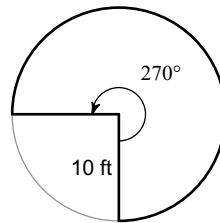
2)



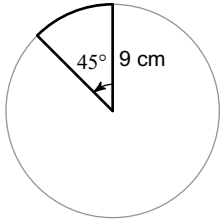
3)



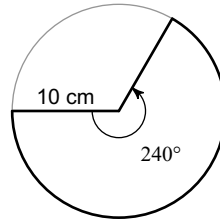
4)



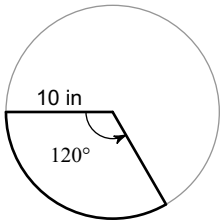
5)



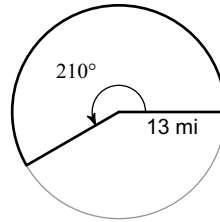
6)



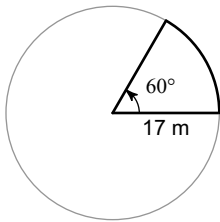
7)



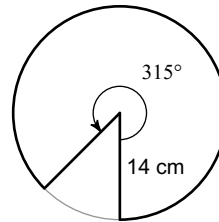
8)



9)



10)



## Answers to Area of Sectors (ID: 1)

1)  $530.1 \text{ in}^2$   
5)  $31.8 \text{ cm}^2$   
9)  $151.3 \text{ m}^2$

2)  $569.7 \text{ m}^2$   
6)  $209.4 \text{ cm}^2$   
10)  $538.8 \text{ cm}^2$

3)  $63.6 \text{ cm}^2$   
7)  $104.7 \text{ in}^2$

4)  $235.6 \text{ ft}^2$   
8)  $309.7 \text{ mi}^2$