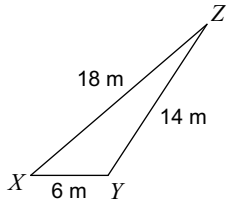


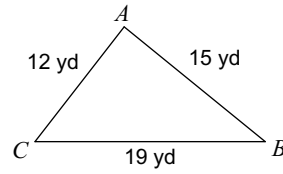
Area of Triangles - Heron's Formula

Find the area of each triangle to the nearest tenth.

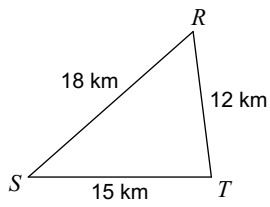
1)



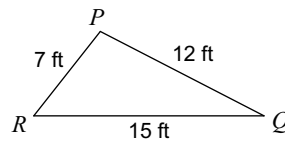
2)



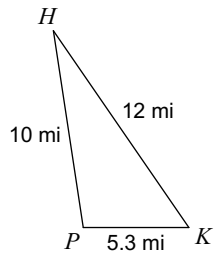
3)



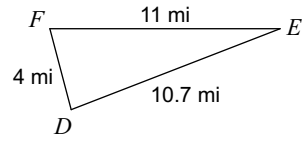
4)



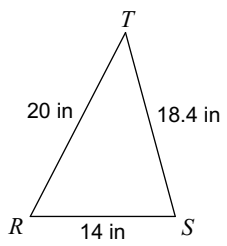
5)



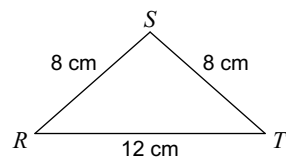
6)



7)



8)



Answers to Area of Triangles - Heron's Formula (ID: 1)

1) 35.1 m^2
5) 26.2 mi^2

2) 90 yd^2
6) 21.3 mi^2

3) 89.3 km^2
7) 124.3 in^2

4) 41.2 ft^2
8) 31.7 cm^2