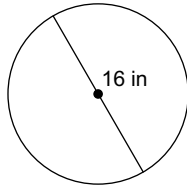


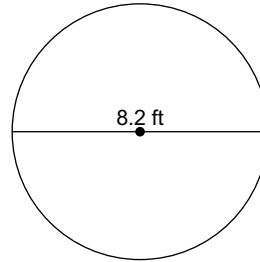
Circumference of a Circle

Find the circumference of each circle. Use your calculator's value of π . Round your answer to the nearest tenth.

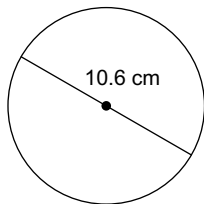
1)



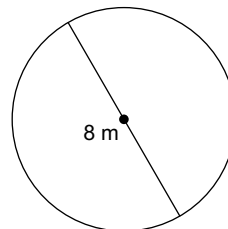
2)



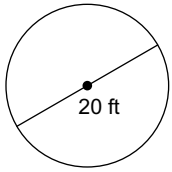
3)



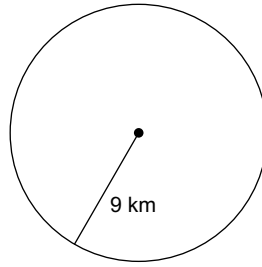
4)



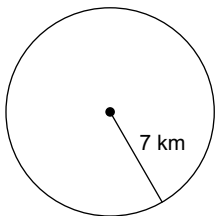
5)



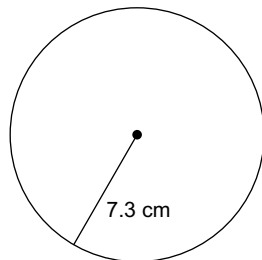
6)



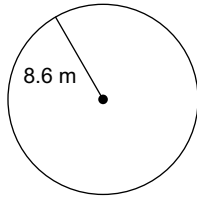
7)



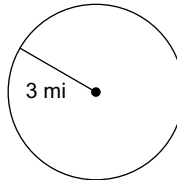
8)



9)



10)



Find the diameter of each circle. Use your calculator's value of π . Round your answer to the nearest tenth.

11) circumference = 35.8 mi

12) circumference = 70.4 cm

13) circumference = 50.3 ft

14) circumference = 65.3 mi

15) circumference = 49.6 ft

Find the radius of each circle. Use your calculator's value of π . Round your answer to the nearest tenth.

16) circumference = 25.1 ft

17) circumference = 42.1 mi

18) circumference = 40.2 mi

19) circumference = 63.5 m

20) circumference = 18.8 in

Answers to Circumference of a Circle (ID: 1)

1) 50.3 in
5) 62.8 ft
9) 54 m
13) 16 ft
17) 6.7 mi

2) 25.8 ft
6) 56.5 km
10) 18.8 mi
14) 20.8 mi
18) 6.4 mi

3) 33.3 cm
7) 44 km
11) 11.4 mi
15) 15.8 ft
19) 10.1 m

4) 25.1 m
8) 45.9 cm
12) 22.4 cm
16) 4 ft
20) 3 in