

Name : _____

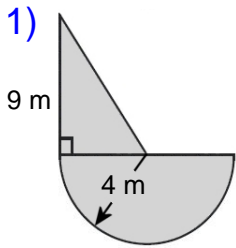
Score : _____

Teacher : _____

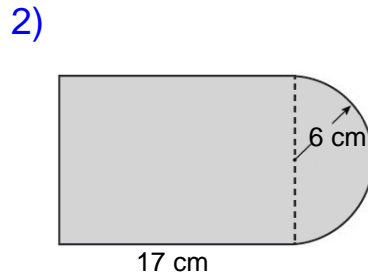
Date : _____

Compound Shapes

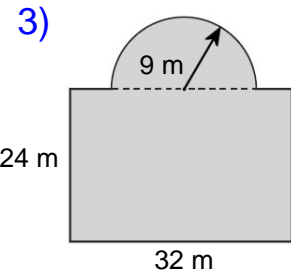
Find the area of each figure, round your answer to two decimal places if necessary.



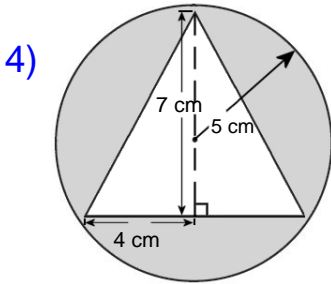
Area: _____



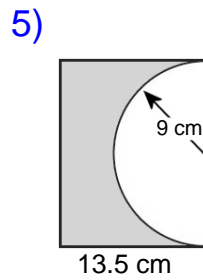
Area: _____



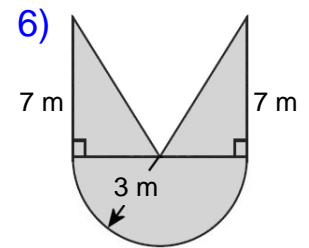
Area: _____



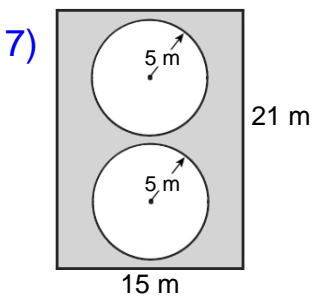
Area: _____



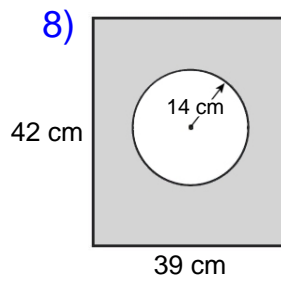
Area: _____



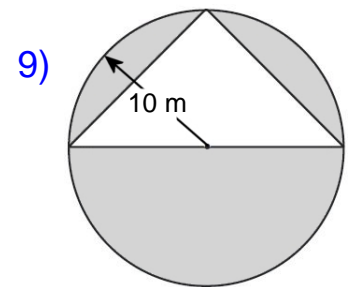
Area: _____



Area: _____



Area: _____



Area: _____

Name : _____

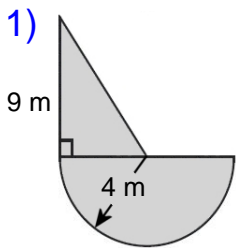
Score : _____

Teacher : _____

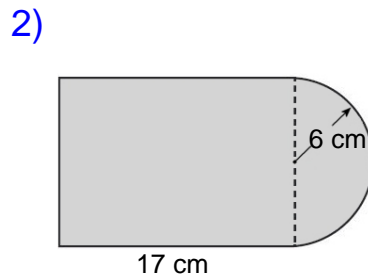
Date : _____

Compound Shapes

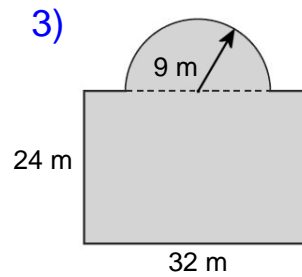
Find the area of each figure, round your answer to two decimal places if necessary.



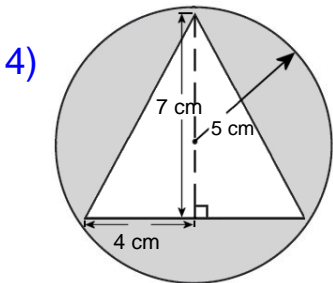
Area: 43.13 m²



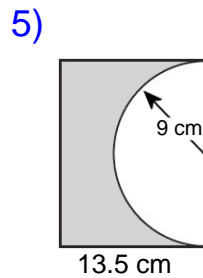
Area: 260.55 cm²



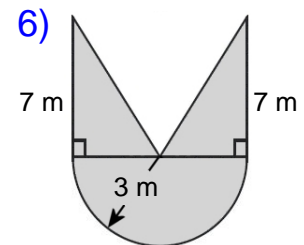
Area: 895.23 m²



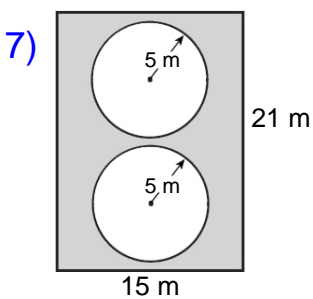
Area: 50.54 cm²



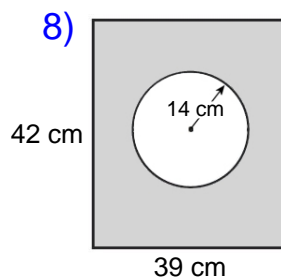
Area: 115.77 cm²



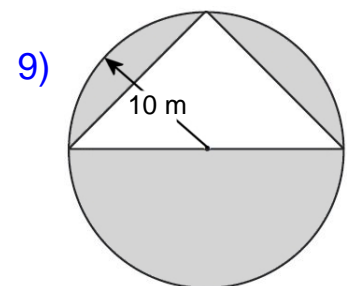
Area: 35.14 m²



Area: 157.92 m²



Area: 1022.25 cm²



Area: 214.16 m²