

Name : _____

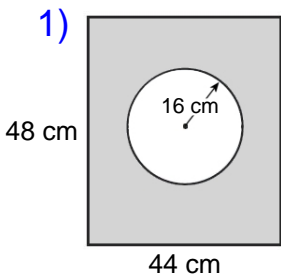
Score : _____

Teacher : _____

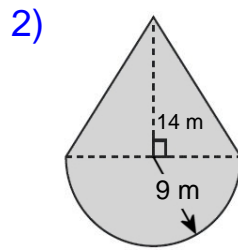
Date : _____

Compound Shapes

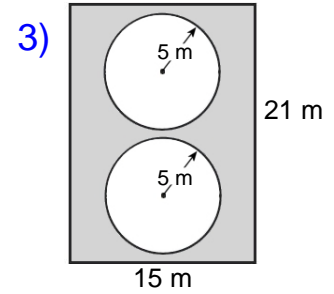
Find the area of each figure, round your answer to two decimal places if necessary.



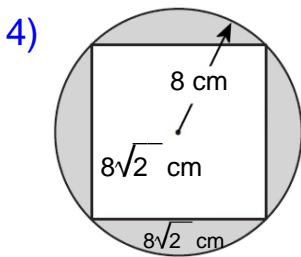
Area: _____



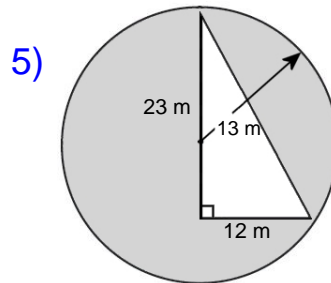
Area: _____



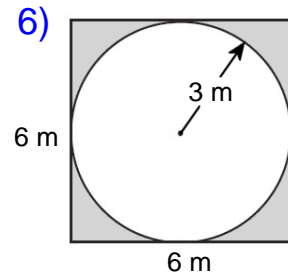
Area: _____



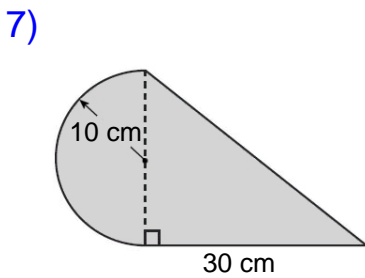
Area: _____



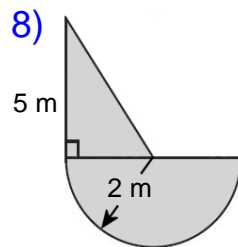
Area: _____



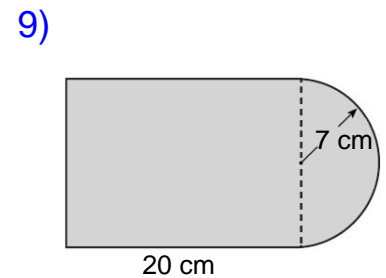
Area: _____



Area: _____



Area: _____



Area: _____

Name : _____

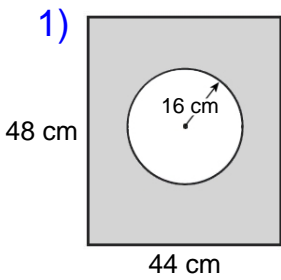
Score : _____

Teacher : _____

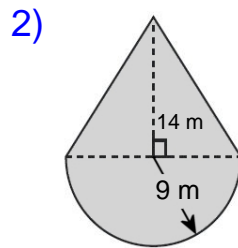
Date : _____

Compound Shapes

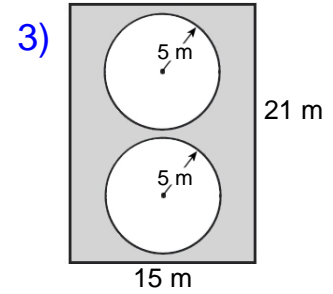
Find the area of each figure, round your answer to two decimal places if necessary.



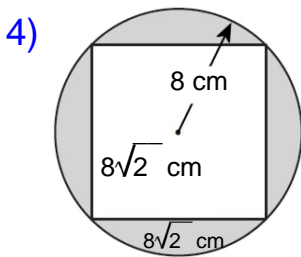
Area: 1307.75 cm²



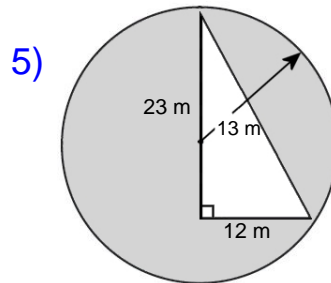
Area: 253.23 m²



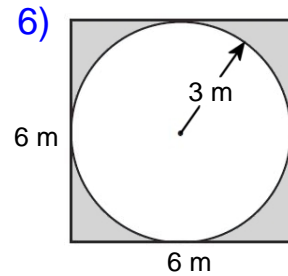
Area: 157.92 m²



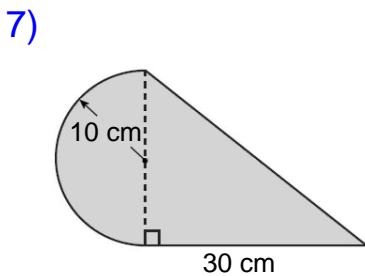
Area: 73.06 cm²



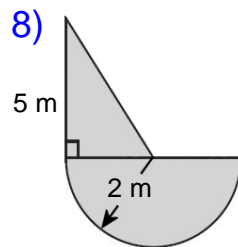
Area: 392.93 m²



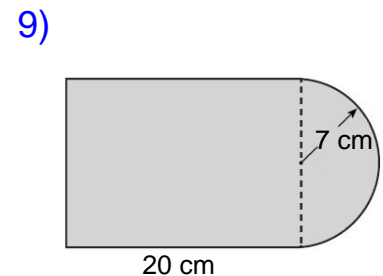
Area: 7.73 m²



Area: 457.08 cm²



Area: 11.28 m²



Area: 356.97 cm²