

Name : _____

Score : _____

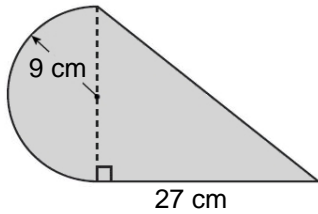
Teacher : _____

Date : _____

Compound Shapes

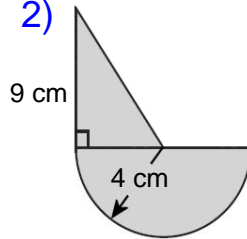
Find the area of each figure, round your answer to two decimal places if necessary.

1)



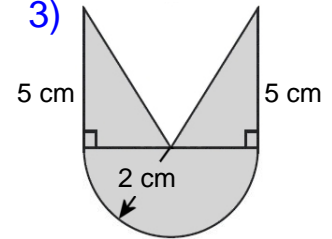
Area: _____

2)



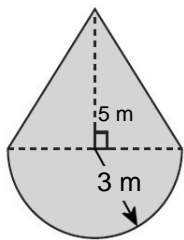
Area: _____

3)



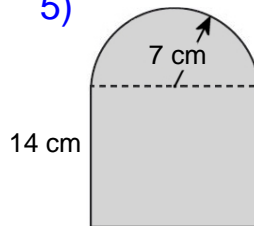
Area: _____

4)



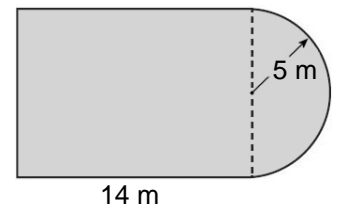
Area: _____

5)



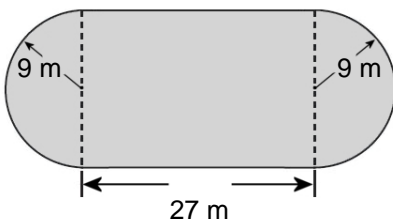
Area: _____

6)



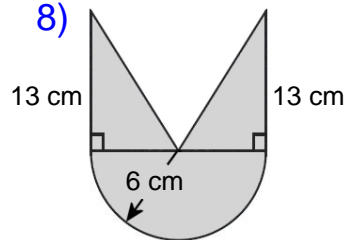
Area: _____

7)



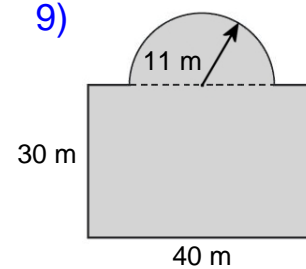
Area: _____

8)



Area: _____

9)



Area: _____

Name : _____

Score : _____

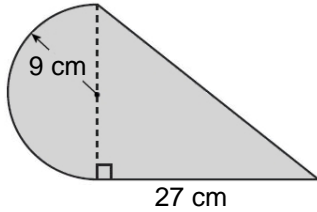
Teacher : _____

Date : _____

Compound Shapes

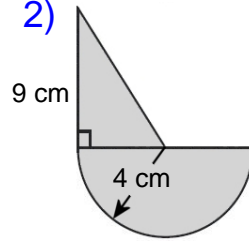
Find the area of each figure, round your answer to two decimal places if necessary.

1)



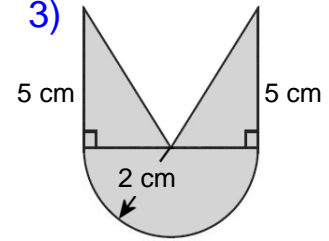
Area: 370.23 cm²

2)



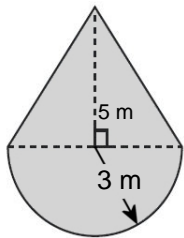
Area: 43.13 cm²

3)



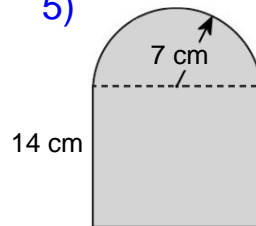
Area: 16.28 cm²

4)



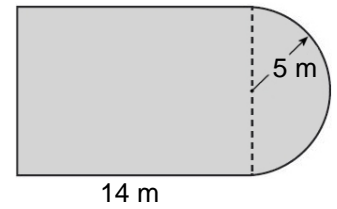
Area: 29.14 m²

5)



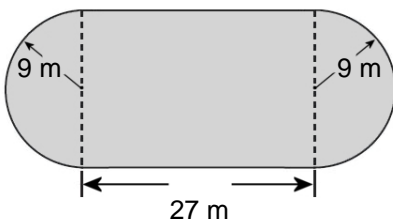
Area: 272.97 cm²

6)



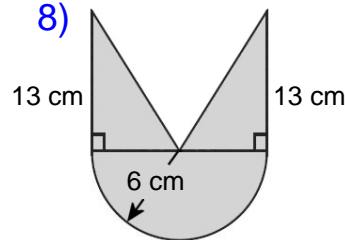
Area: 179.27 m²

7)



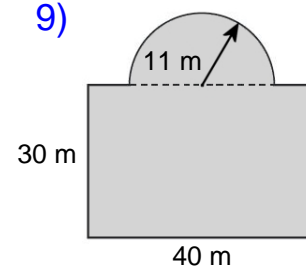
Area: 740.47 m²

8)



Area: 134.55 cm²

9)



Area: 1390.07 m²