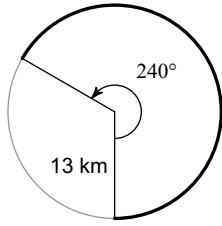


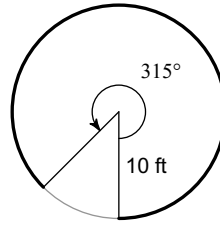
Determining Arc Length

Find the length of each arc. Round your answers to the nearest tenth.

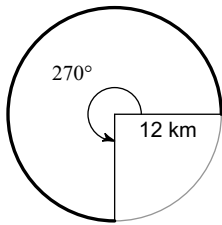
1)



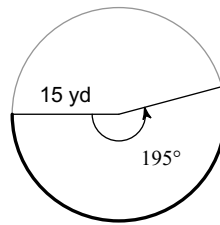
2)



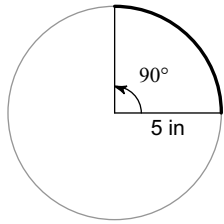
3)



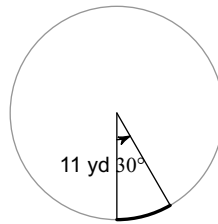
4)



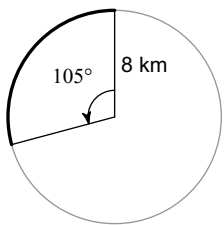
5)



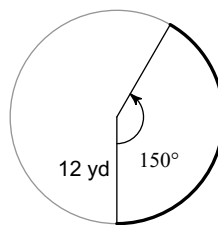
6)



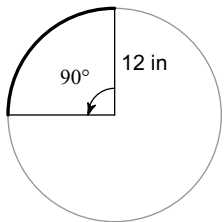
7)



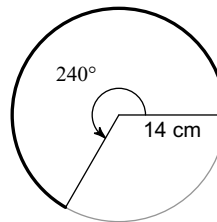
8)



9)



10)



Answers to Determining Arc Length (ID: 1)

1) 54.5 km
5) 7.9 in
9) 18.8 in

2) 55.0 ft
6) 5.8 yd
10) 58.6 cm

3) 56.5 km
7) 14.7 km

4) 51.1 yd
8) 31.4 yd