

Sketching Linear Functions

© 2018 Kuta Software LLC. All rights reserved.

Sketch the graph of each line.

1) $y = -\frac{8}{3}x + 3$

2) $y = \frac{3}{2}x - 2$

3) $y = x - 1$

4) $y = -\frac{5}{4}x$

5) $9x - y = -4$

6) $x + 5y = -25$

7) $3x + y = 2$

8) $x + 5y = 0$

9) $15 = -2x + 3y$

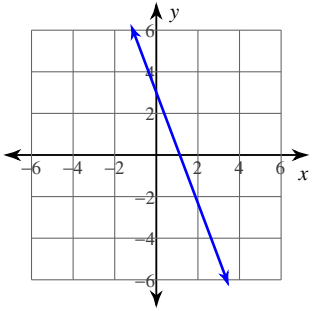
10) $5x - 20 = -4y$

11) $6 + 3y + 3x = 0$

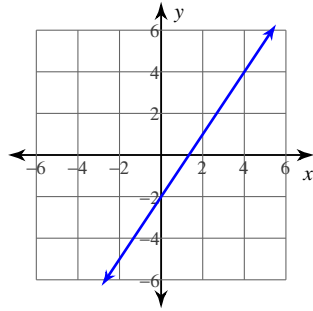
12) $-\frac{10}{3} - \frac{5}{3}y = x$

Answers to Sketching Linear Functions (ID: 1)

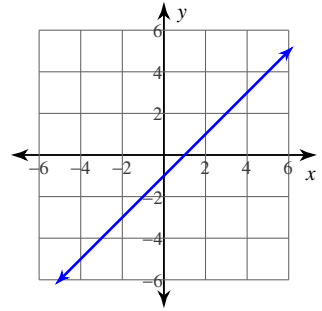
1)



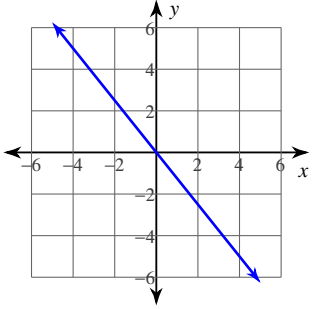
2)



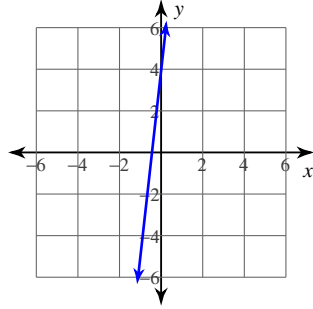
3)



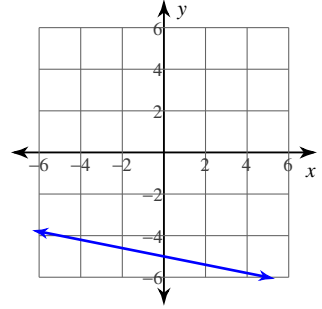
4)



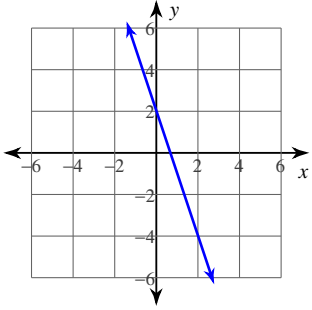
5)



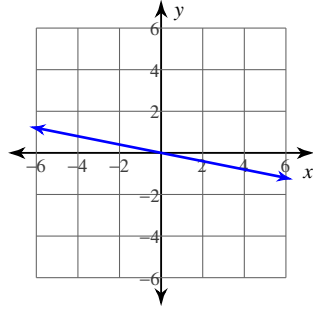
6)



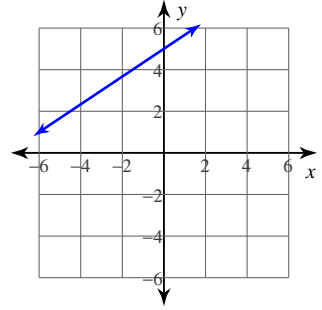
7)



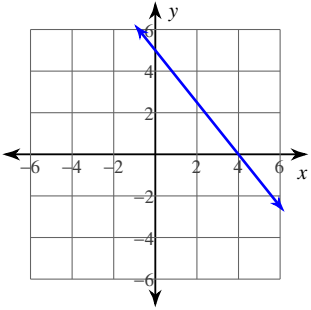
8)



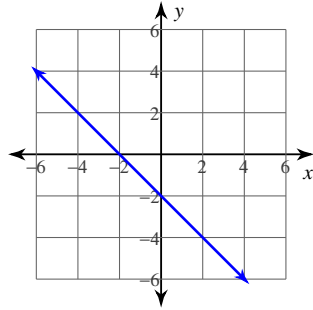
9)



10)



11)



12)

