

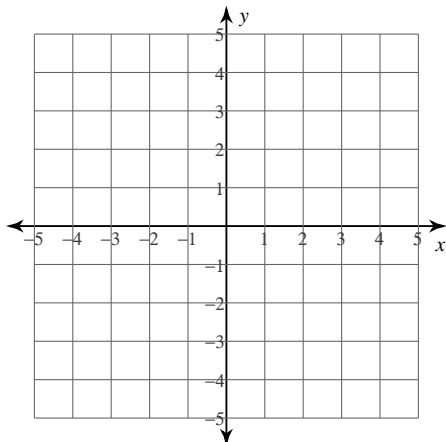
Solving Systems by Graphing and Comparison

© 2015 Kuta Software LLC. All rights reserved.

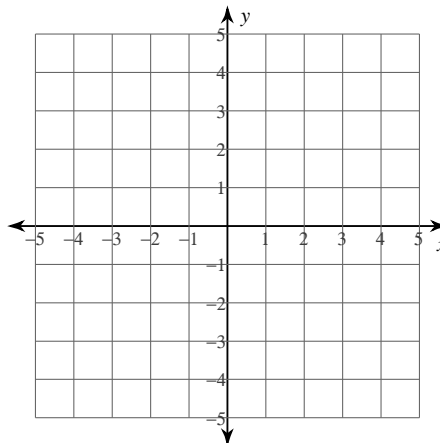
Solve each system by graphing and verify your answer by comparison.

1) $y = \frac{1}{2}x + 3$

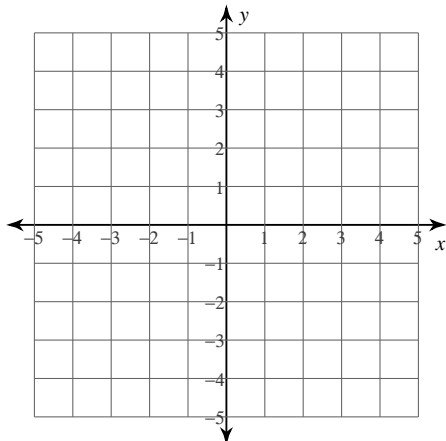
$$y = -\frac{5}{4}x - 4$$



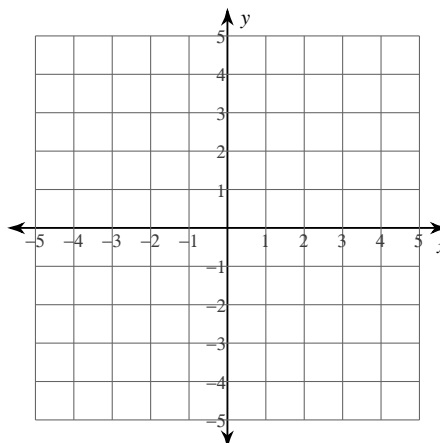
2) $y = -5x - 1$
 $y = 4$



3) $y = x + 4$
 $y = -4x - 1$

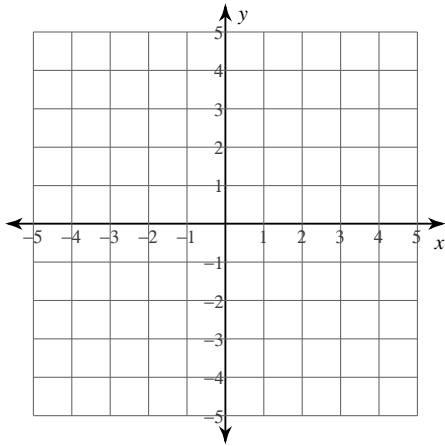


4) $y = -\frac{1}{2}x - 1$
 $y = \frac{1}{2}x - 3$



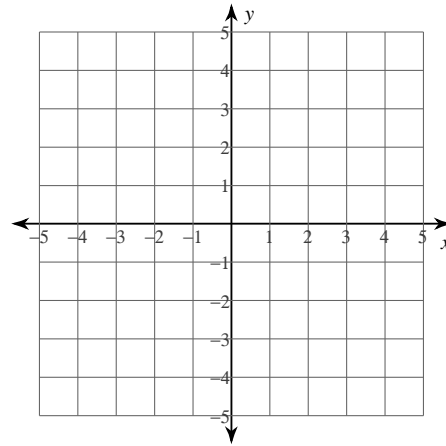
$$5) y = \frac{4}{3}x - 1$$

$$y = -\frac{1}{3}x + 4$$



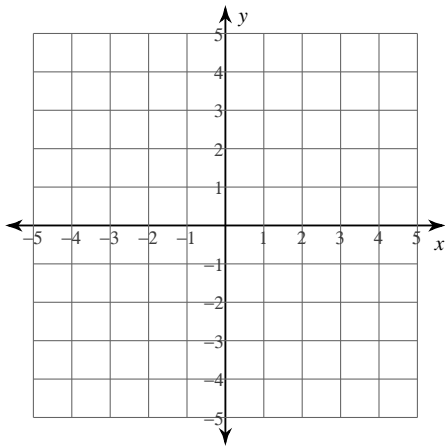
$$6) y = -\frac{1}{2}x + 1$$

$$y = -\frac{1}{2}x - 2$$



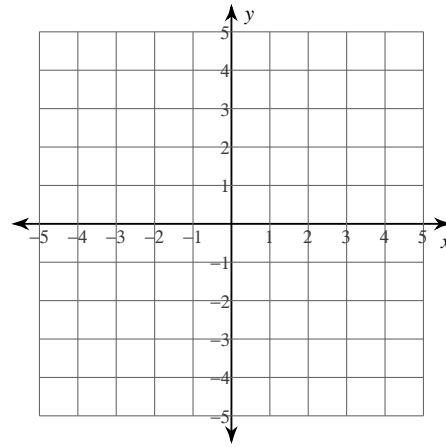
$$7) y = -4x - 3$$

$$y = 3x + 4$$



$$8) y = -\frac{1}{2}x - 4$$

$$y = \frac{5}{4}x + 3$$



Answers to Solving Systems by Graphing and Comparison (ID: 1)

1) $(-4, 1)$

2) $(-1, 4)$

3) $(-1, 3)$

4) $(2, -2)$

5) $(3, 3)$

6) No solution

7) $(-1, 1)$

8) $(-4, -2)$