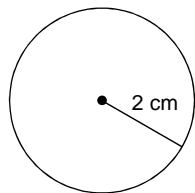


Practice on Circumference

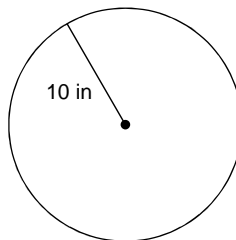
© 2018 Kuta Software LLC. All rights reserved.

Find the circumference of each circle.

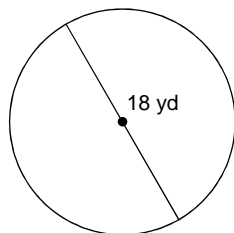
1)



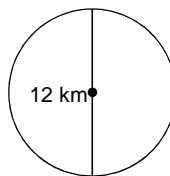
2)



3)



4)



5) radius = 8 yd

6) radius = 11 m

7) diameter = 8 ft

8) diameter = 14 cm

Find the radius of each circle.9) circumference = 4π in10) circumference = 24π yd11) circumference = 16π km12) circumference = 10π mi**Find the diameter of each circle.**13) circumference = 14π yd14) circumference = 20π cm15) circumference = 6π ft16) circumference = 8π m

Answers to Practice on Circumference (ID: 1)

1) 4π cm

2) 20π in

3) 18π yd

4) 12π km

5) 16π yd

6) 22π m

7) 8π ft

8) 14π cm

9) 2 in

10) 12 yd

11) 8 km

12) 5 mi

13) 14 yd

14) 20 cm

15) 6 ft

16) 8 m