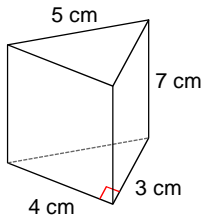


Surface Area of Prisms

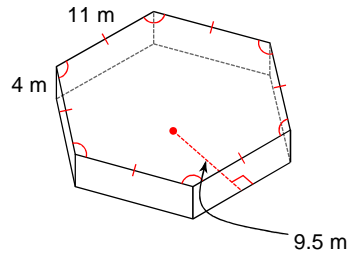
© 2018 Kuta Software LLC. All rights reserved.

Find the surface area of each figure. Round your answers to the nearest hundredth, if necessary.

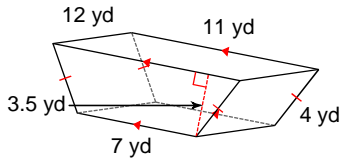
1)



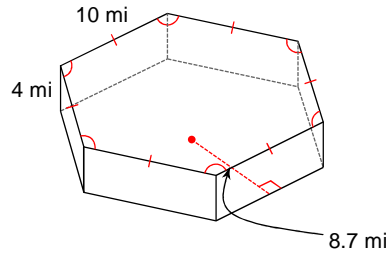
2)



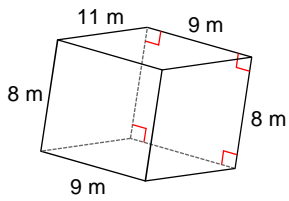
3)



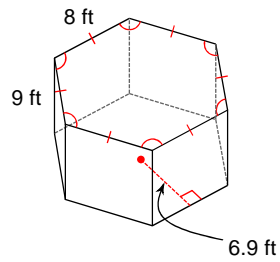
4)



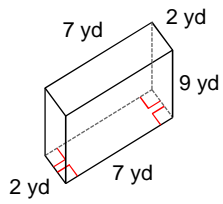
5)



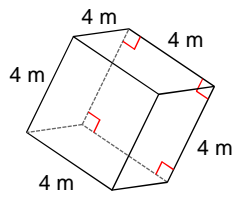
6)



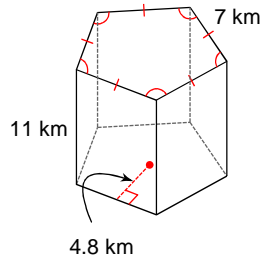
7)



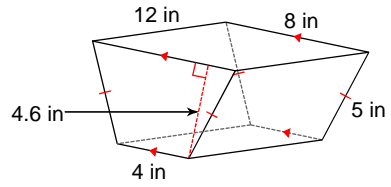
8)



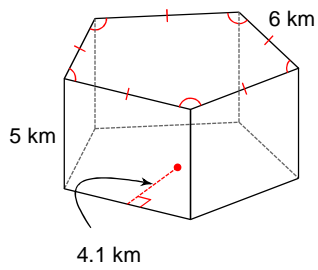
9)



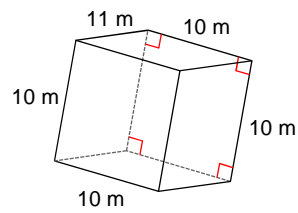
10)



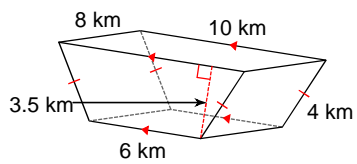
11)



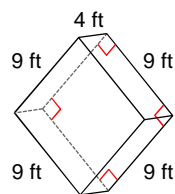
12)



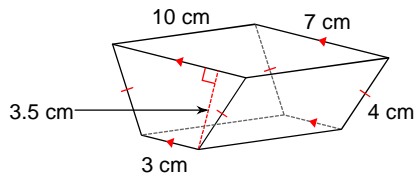
13)



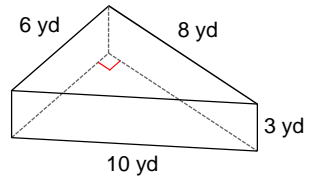
14)



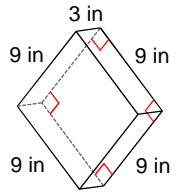
15)



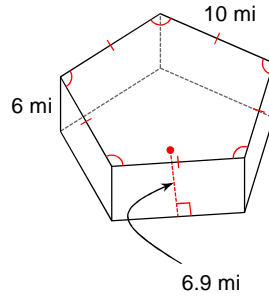
16)



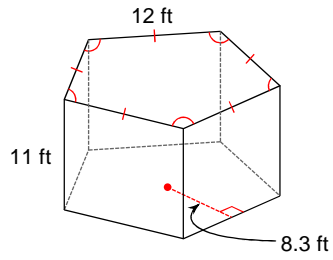
17)



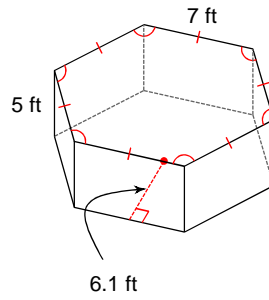
18)



19)



20)



Answers to Surface Area of Prisms (ID: 1)

- | | | | |
|------------------------|--------------------------|-------------------------|--------------------------|
| 1) 96 cm^2 | 2) 891 m^2 | 3) 375 yd^2 | 4) 762 mi^2 |
| 5) 518 m^2 | 6) 763.2 ft^2 | 7) 190 yd^2 | 8) 96 m^2 |
| 9) 553 km^2 | 10) 319.2 in^2 | 11) 273 km^2 | 12) 640 m^2 |
| 13) 248 km^2 | 14) 306 ft^2 | 15) 215 cm^2 | 16) 120 yd^2 |
| 17) 270 in^2 | 18) 645 mi^2 | 19) 1158 ft^2 | 20) 466.2 ft^2 |