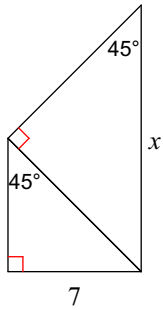


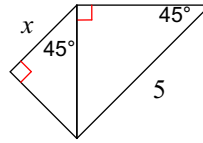
More Practice on Special Right Triangles

Find the missing side lengths. Leave your answers as radicals in simplest form.

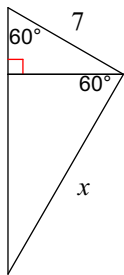
1)



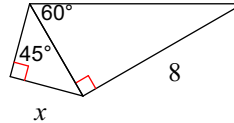
2)



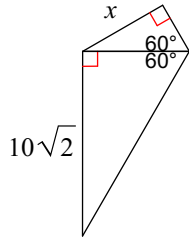
3)



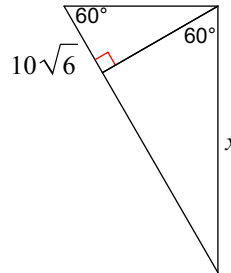
4)



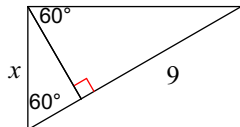
5)



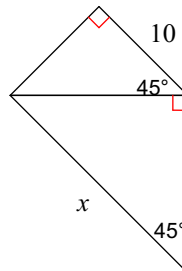
6)



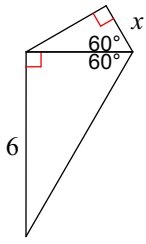
7)



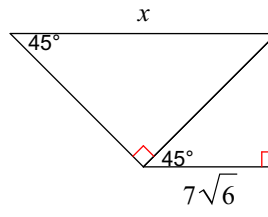
8)



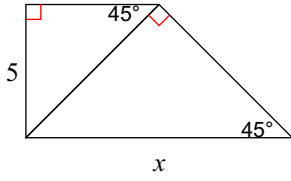
9)



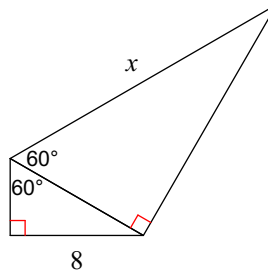
10)



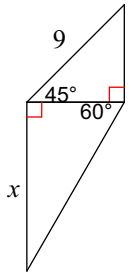
11)



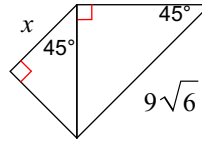
12)



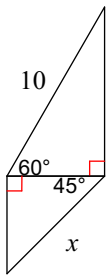
13)



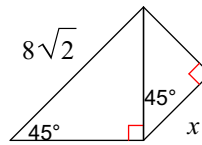
14)



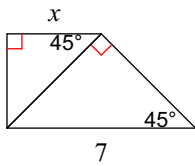
15)



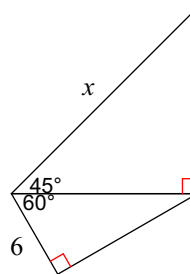
16)



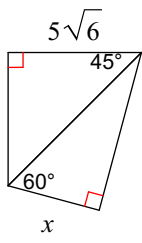
17)



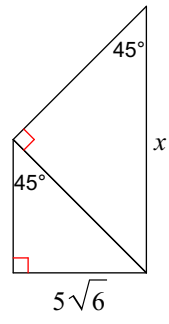
18)



19)



20)



Answers to More Practice on Special Right Triangles (ID: 1)

1) 14

2) $\frac{5}{2}$

3) $7\sqrt{3}$

4) $\frac{4\sqrt{6}}{3}$

5) $5\sqrt{2}$

6) $60\sqrt{2}$

7) 6

8) 20

9) $\sqrt{3}$

10) $14\sqrt{6}$

11) 10

12) $\frac{32\sqrt{3}}{3}$

13) $\frac{9\sqrt{6}}{2}$

14) $\frac{9\sqrt{6}}{2}$

15) $5\sqrt{2}$

16) $4\sqrt{2}$

17) $\frac{7}{2}$

18) $12\sqrt{2}$

19) $5\sqrt{3}$

20) $10\sqrt{6}$