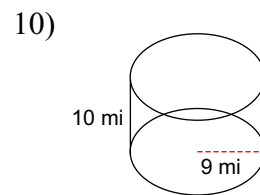
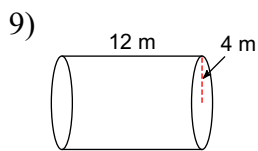
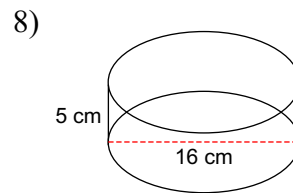
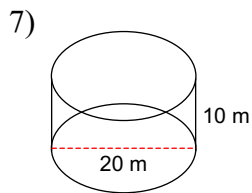
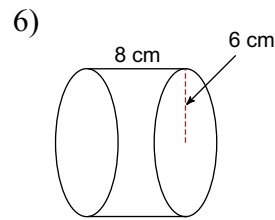
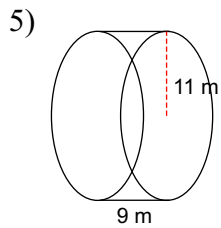
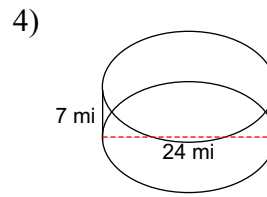
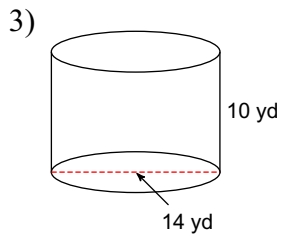
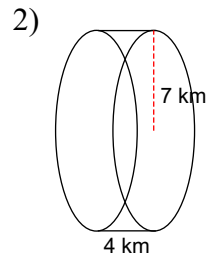
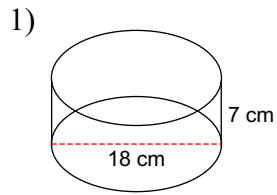


Surface Area of Cylinders

Find the surface area of each figure. Round your answers to the nearest hundredth, if necessary.



Answers to Surface Area of Cylinders (ID: 1)

- 1) 904.78 cm^2
- 5) 1382.3 m^2
- 9) 402.12 m^2

- 2) 483.81 km^2
- 6) 527.79 cm^2
- 10) 1074.42 mi^2

- 3) 747.7 yd^2
- 7) 1256.64 m^2

- 4) 1432.57 mi^2
- 8) 653.45 cm^2