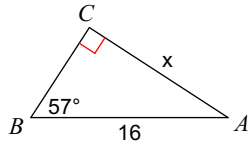


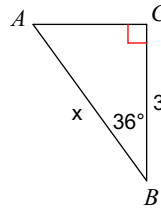
Trig - Find the missing side

Find the measure of each side indicated. Round to the nearest tenth.

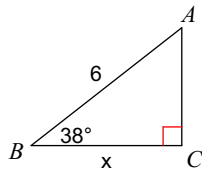
1)



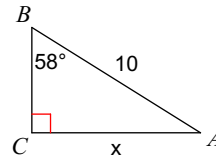
2)



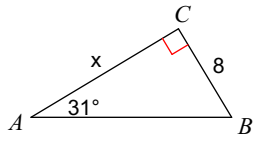
3)



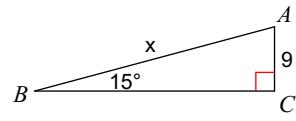
4)



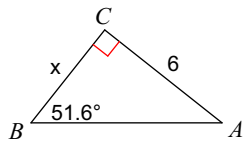
5)



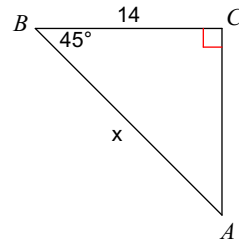
6)



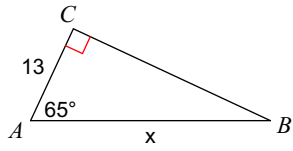
7)



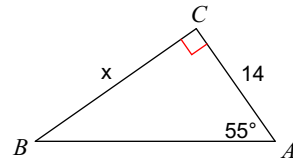
8)



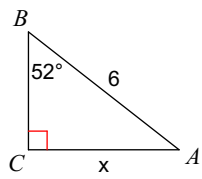
9)



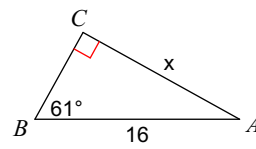
10)



11)



12)



Answers to Trig - Find the missing side (ID: 1)

1) 13.4
5) 13.3
9) 30.8

2) 3.7
6) 34.8
10) 20

3) 4.7
7) 4.8
11) 4.7

4) 8.5
8) 19.8
12) 14