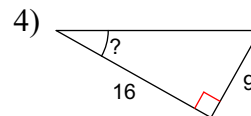
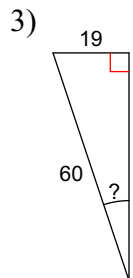
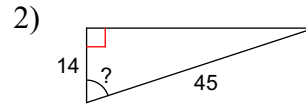
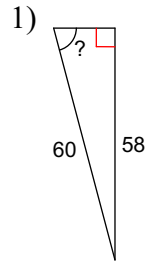
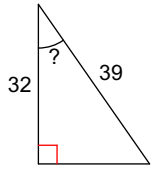


Trig - Finding a missing angle

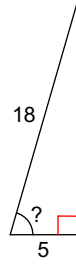
Find the measure of the indicated angle to the nearest degree.



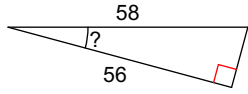
5)



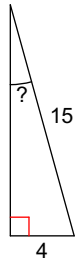
6)



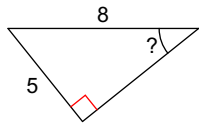
7)



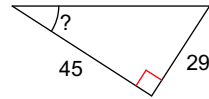
8)



9)



10)



Answers to Trig - Finding a missing angle (ID: 1)

- 1) 75°
- 5) 35°
- 9) 39°

- 2) 72°
- 6) 74°
- 10) 33°

- 3) 18°
- 7) 15°

- 4) 29°
- 8) 15°