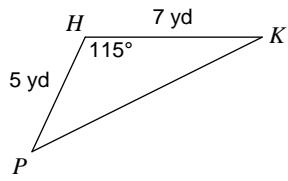


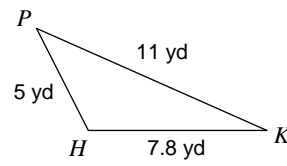
Area of Triangles

Find the area of each triangle to the nearest tenth.

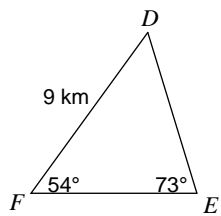
1)



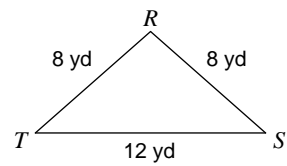
2)



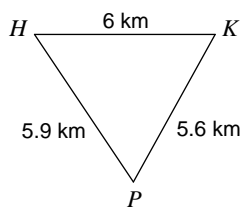
3)



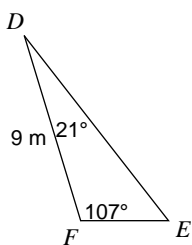
4)



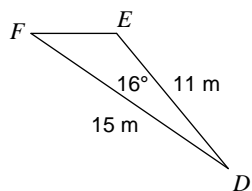
5)



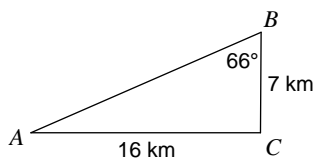
6)



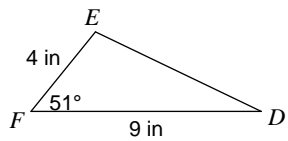
7)



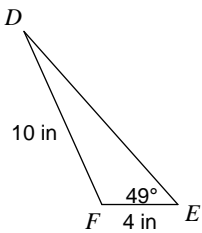
8)



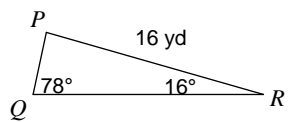
9)



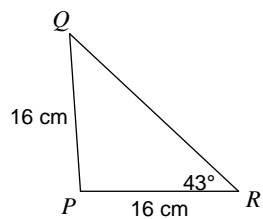
10)



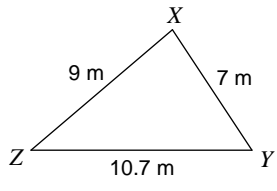
11)



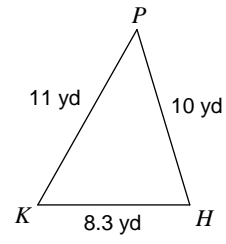
12)



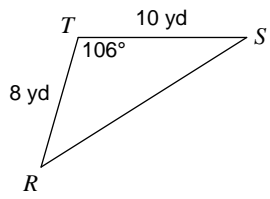
13)



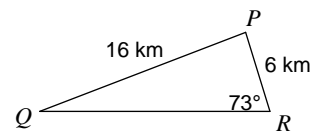
14)



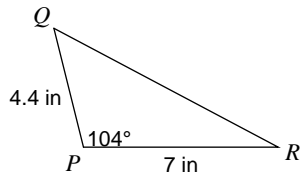
15)



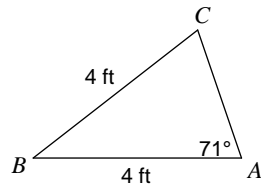
16)



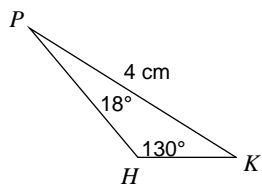
17)



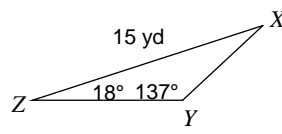
18)



19)



20)



Answers to Area of Triangles

- 1) 15.9 yd²
- 5) 14.7 km²
- 9) 14 in²
- 13) 31.3 m²
- 17) 14.9 in²

- 2) 17.4 yd²
- 6) 17.6 m²
- 10) 18.4 in²
- 14) 39.7 yd²
- 18) 4.9 ft²

- 3) 27.3 km²
- 7) 22.7 m²
- 11) 35.9 yd²
- 15) 38.5 yd²
- 19) 1.7 cm²

- 4) 31.7 yd²
- 8) 56 km²
- 12) 127.7 cm²
- 16) 47.9 km²
- 20) 21.6 yd²